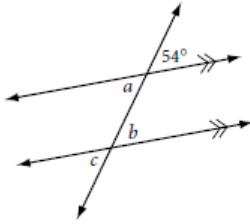


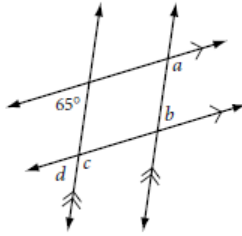
HW 2.3 Angle Conjectures

For Exercises 1–3, use your conjectures to find each angle measure.

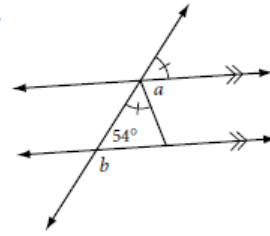
1.



2.

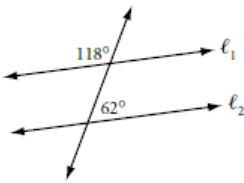


3.

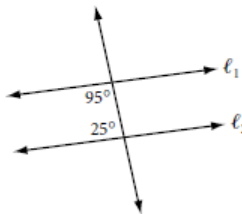


For Exercises 4–6, use your conjectures to determine whether $\ell_1 \parallel \ell_2$, and explain why. If not enough information is given, write “cannot be determined.”

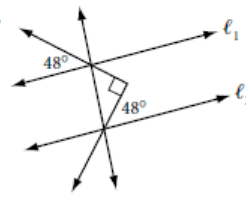
4.



5.



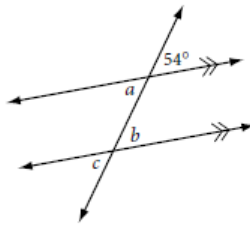
6.



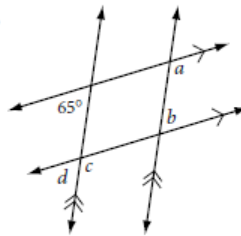
HW 2.3 Angle Conjectures

For Exercises 1–3, use your conjectures to find each angle measure.

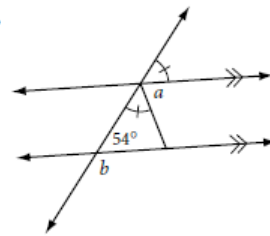
1.



2.

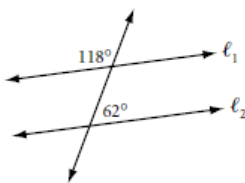


3.

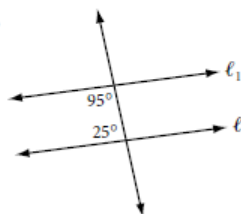


For Exercises 4–6, use your conjectures to determine whether $\ell_1 \parallel \ell_2$, and explain why. If not enough information is given, write “cannot be determined.”

4.



5.



6.

