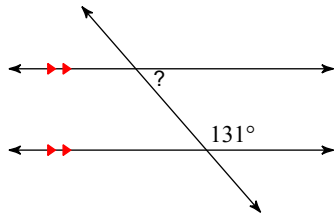


HW 2.4 All the Angles

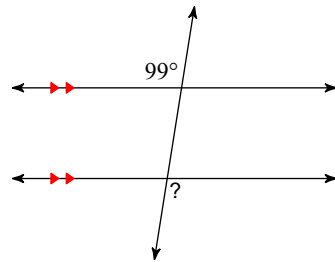
Find the measure of each angle indicated AND name the angle relationship.

Options: corresponding, alternate interior, alternate exterior, same side interior, vertical angles

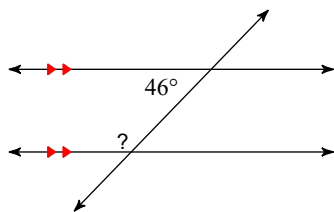
1)



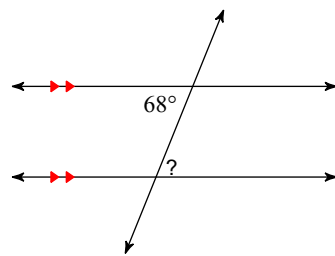
2)



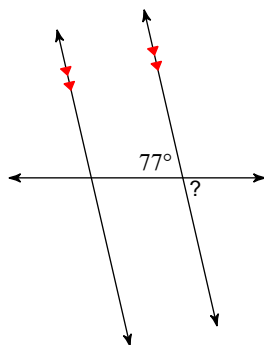
3)



4)



5)



6)

