

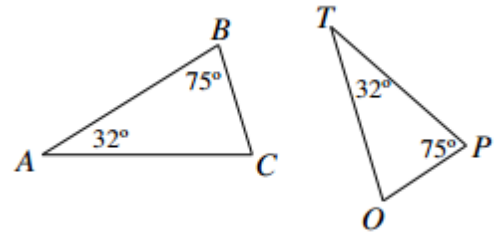
HW 3.6 Similar or Nah?

Two shapes are SIMILAR if _____ and _____.

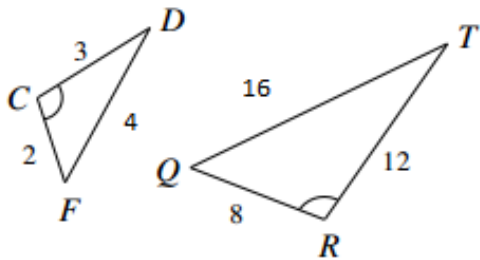
Decide if the triangle pairs below are similar. Make sure you include a complete justification AND a similarity statement.

EXAMPLE:

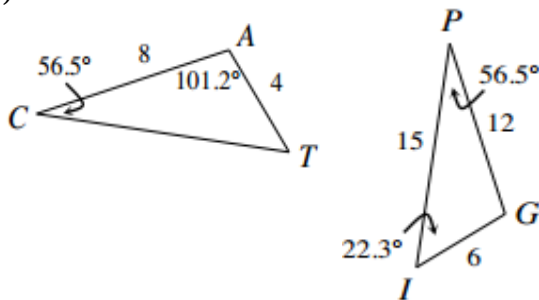
Since $\angle A \cong \angle T$ (read: angle A is congruent to angle T) **AND** $\angle B \cong \angle P$ we can say the triangles are similar by angle-angle similarity ($AA\sim$)



1)



2)



3)

